




---

1   $y = 1x - 18 \{2 \leq x \leq 6\}$


---

2   $y = \frac{1}{2}x - 15 \{6 \leq x \leq 8\}$


---

3   $y = -11 \{8 \leq x \leq 12\}$


---

4   $y = -\frac{1}{2}x - 5 \{12 \leq x \leq 14\}$


---

5   $y = -1x + 2 \{14 \leq x \leq 18\}$


---

6   $x = 18 \{-20 \leq y \leq -16\}$


---

7   $x = 2 \{-20 \leq y \leq -16\}$


---

8   $y = -1x - 18 \{2 \leq x \leq 3\}$


---

9   $y = 1x - 38 \{17 \leq x \leq 18\}$


---

10   $y = -21 \{-10 \leq x \leq 30\}$


---

11   $y = -20 \{6 \leq x \leq 14\}$


---

12   $y = -2x - 8 \{5.5 \leq x \leq 6\}$


---

13   $y = 1x - 34 \{14 \leq x \leq 15\}$


---

14   $x = 6 \{-16 \leq y \leq -14\}$


---

15   $x = 8 \{-16 \leq y \leq -14\}$


---

16   $y = -16 \{6 \leq x \leq 8\}$


---

17   $y = -14 \{6 \leq x \leq 8\}$


---

18   $x = 8 \{-8 \leq y \leq -7\}$


---

19   $x = 12 \{-16 \leq y \leq -14\}$


20

  $x = 14 \{-16 \leq y \leq -14\}$


21

  $y = -14 \{12 \leq x \leq 14\}$


22

  $y = -16 \{12 \leq x \leq 14\}$


23

  $x = 12 \{-8 \leq y \leq -7\}$

24

  $y = 1x - 15 \{8 \leq x \leq 9\}$


25

  $y = -x + 3 \{9 \leq x \leq 10\}$


26

  $y = 1x - 17 \{10 \leq x \leq 11\}$


27

  $y = -1x + 5 \{11 \leq x \leq 12\}$

28

  $y = -1x \{8 \leq x \leq 10\}$

29

  $y = 1x + -20 \{10 \leq x \leq 12\}$